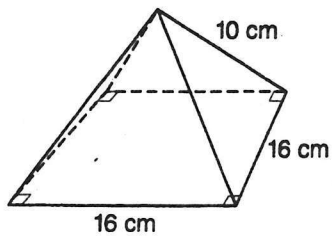


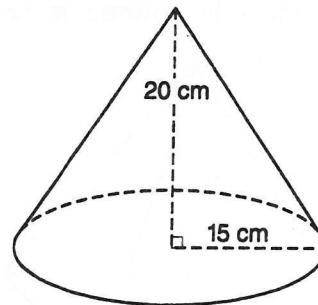
PracticeStudent Edition
Pages 599-606**Surface Area of Pyramids and Cones**

Find the lateral area of each regular pyramid or right cone.
Round to the nearest tenth.

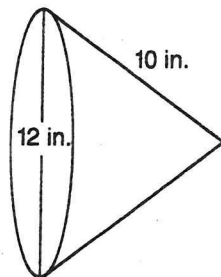
1.



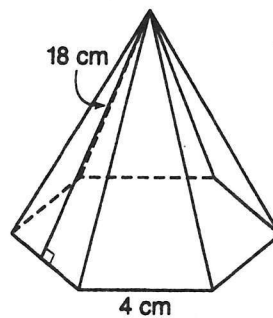
2.



3.

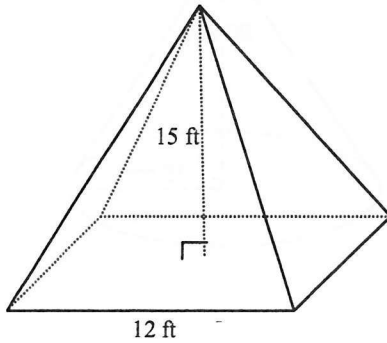


4.



Homework- Module 30 - "Volumes of Pyramids and Cones"

1. a. What is the volume formula for a pyramid?
- b. What is the volume of the pyramid below?



2. a. What is the formula for the volume of a cone?

- b. What is the volume of the cone below

